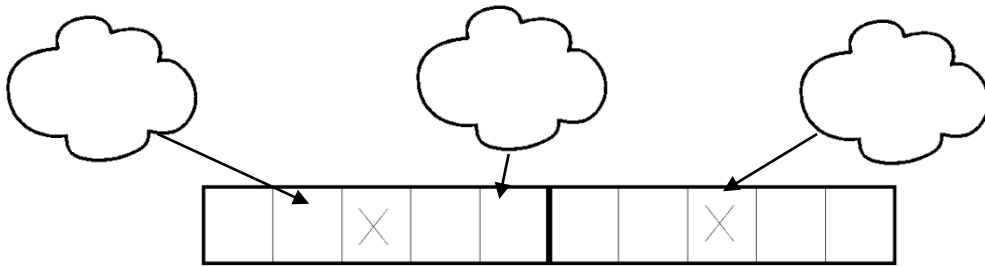


Numération

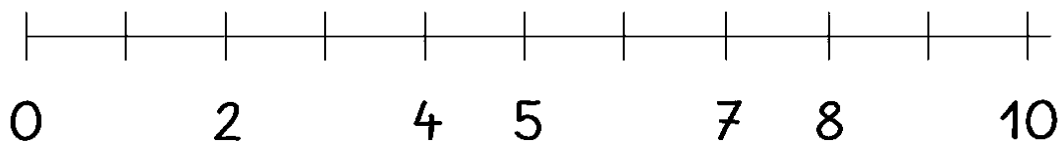
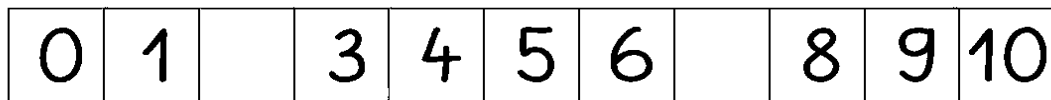
1



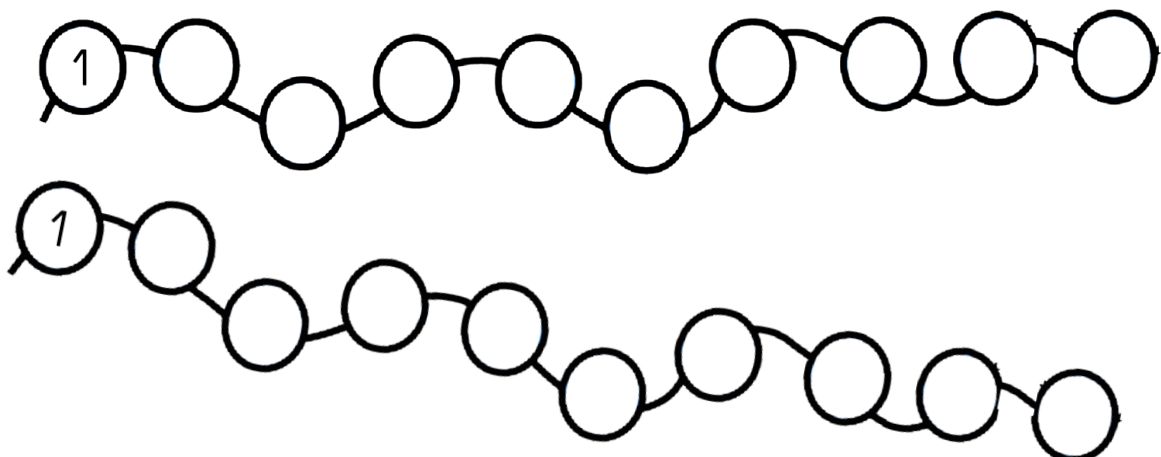
- 1- Complète uniquement les nuages qui montrent les cases de la boîte de dix jetons :



- 2- Complète ces bandes numériques :







- 3- Complète ces colliers de nombres :






4- Compare :

Entoure le plus grand nombre



Entoure le plus petit nombre



5 - Ecris dans l'étiquette le nombre qui manque :

1 2 3 4 6 7 8 9 ○

1 2 3 4 5 6 8 9 ○

1 2 3 4 5 6 7 9 ○

1 2 3 4 5 6 7 8 ○



2 3 4 5 6 7 8 9 ○



1 2 3 4 5 7 8 9 ○



1 2 4 5 6 7 8 9 ○



1 3 4 5 6 7 8 9 ○



6 - Compte avec les dés :



 
 + =

 
 + =

 
 + =

 
 + =

 
 + =

 
 + =

Bonus : Points à relier

1 → 20

