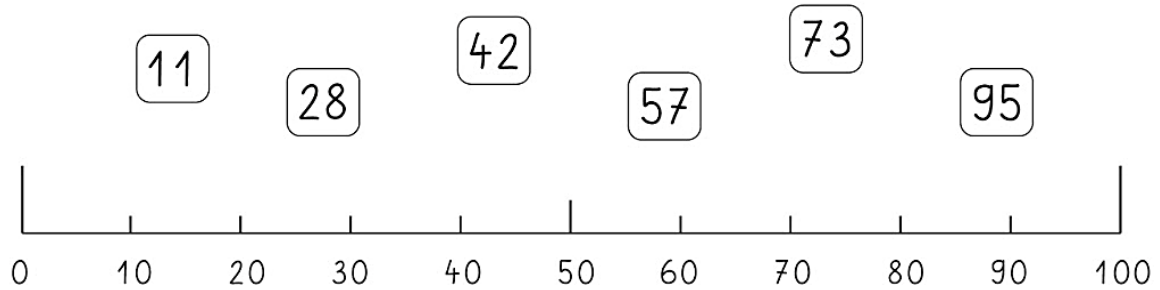


Numération

22



1- Relie :



2- Imagine le château des nombres et colorie les cases :

0									
									99

CONSIGNES :

JAUNE : 30, 31, 32, 33, 36, 37, 38, 39 , 60, 61, 62, 63, 66, 67, 68, 69

3, 13, 23, 63, 73, 83, 93, 6, 16, 26, 66, 76, 86 ,96

ROUGE : 44, 45, 54, 55

VERT : 0, 11, 22, 90, 81, 72, 27, 18, 9, 99, 88, 77

3- Ecris les nombres dans les cases grises :

60			64			68	
.....	71			75	76

4- Recopie les nombres de ce tableau dans l'ordre croissant :


36	85	/	34	67
56	46	47	65	
75	87	55	86	
77	54	44	64	

34 < ... < ... < ... < ... < ... < ... < ... < ... < ... < ... < ... < ... < ... < ... < ... < ... < ...

5- Colorie d'une même couleur le double et sa moitié :

<div style="border: 1px solid black; width: 50px; height: 50px; margin: 5px; display: flex; align-items: center; justify-content: center;">14</div> <div style="border: 1px solid black; width: 50px; height: 50px; margin: 5px; display: flex; align-items: center; justify-content: center;">16</div> <div style="border: 1px solid black; width: 50px; height: 50px; margin: 5px; display: flex; align-items: center; justify-content: center;">7</div> <div style="border: 1px solid black; width: 50px; height: 50px; margin: 5px; display: flex; align-items: center; justify-content: center;">5</div> <div style="border: 1px solid black; width: 50px; height: 50px; margin: 5px; display: flex; align-items: center; justify-content: center;">10</div> <div style="border: 1px solid black; width: 50px; height: 50px; margin: 5px; display: flex; align-items: center; justify-content: center;">8</div>	<div style="border: 1px solid black; width: 50px; height: 50px; margin: 5px; display: flex; align-items: center; justify-content: center;">14</div> <div style="border: 1px solid black; width: 50px; height: 50px; margin: 5px; display: flex; align-items: center; justify-content: center;">18</div> <div style="border: 1px solid black; width: 50px; height: 50px; margin: 5px; display: flex; align-items: center; justify-content: center;">7</div> <div style="border: 1px solid black; width: 50px; height: 50px; margin: 5px; display: flex; align-items: center; justify-content: center;">9</div> <div style="border: 1px solid black; width: 50px; height: 50px; margin: 5px; display: flex; align-items: center; justify-content: center;">4</div> <div style="border: 1px solid black; width: 50px; height: 50px; margin: 5px; display: flex; align-items: center; justify-content: center;">8</div>	<div style="border: 1px solid black; width: 50px; height: 50px; margin: 5px; display: flex; align-items: center; justify-content: center;">4</div> <div style="border: 1px solid black; width: 50px; height: 50px; margin: 5px; display: flex; align-items: center; justify-content: center;">14</div> <div style="border: 1px solid black; width: 50px; height: 50px; margin: 5px; display: flex; align-items: center; justify-content: center;">7</div> <div style="border: 1px solid black; width: 50px; height: 50px; margin: 5px; display: flex; align-items: center; justify-content: center;">8</div> <div style="border: 1px solid black; width: 50px; height: 50px; margin: 5px; display: flex; align-items: center; justify-content: center;">18</div> <div style="border: 1px solid black; width: 50px; height: 50px; margin: 5px; display: flex; align-items: center; justify-content: center;">9</div>
<div style="border: 1px solid black; border-radius: 50%; width: 50px; height: 50px; margin: 5px; display: flex; align-items: center; justify-content: center;">4</div> <div style="border: 1px solid black; border-radius: 50%; width: 50px; height: 50px; margin: 5px; display: flex; align-items: center; justify-content: center;">14</div> <div style="border: 1px solid black; border-radius: 50%; width: 50px; height: 50px; margin: 5px; display: flex; align-items: center; justify-content: center;">7</div> <div style="border: 1px solid black; border-radius: 50%; width: 50px; height: 50px; margin: 5px; display: flex; align-items: center; justify-content: center;">8</div> <div style="border: 1px solid black; border-radius: 50%; width: 50px; height: 50px; margin: 5px; display: flex; align-items: center; justify-content: center;">12</div> <div style="border: 1px solid black; border-radius: 50%; width: 50px; height: 50px; margin: 5px; display: flex; align-items: center; justify-content: center;">6</div>	<div style="border: 1px solid black; border-radius: 50%; width: 50px; height: 50px; margin: 5px; display: flex; align-items: center; justify-content: center;">14</div> <div style="border: 1px solid black; border-radius: 50%; width: 50px; height: 50px; margin: 5px; display: flex; align-items: center; justify-content: center;">18</div> <div style="border: 1px solid black; border-radius: 50%; width: 50px; height: 50px; margin: 5px; display: flex; align-items: center; justify-content: center;">5</div> <div style="border: 1px solid black; border-radius: 50%; width: 50px; height: 50px; margin: 5px; display: flex; align-items: center; justify-content: center;">7</div> <div style="border: 1px solid black; border-radius: 50%; width: 50px; height: 50px; margin: 5px; display: flex; align-items: center; justify-content: center;">10</div> <div style="border: 1px solid black; border-radius: 50%; width: 50px; height: 50px; margin: 5px; display: flex; align-items: center; justify-content: center;">9</div>	<div style="border: 1px solid black; border-radius: 50%; width: 50px; height: 50px; margin: 5px; display: flex; align-items: center; justify-content: center;">16</div> <div style="border: 1px solid black; border-radius: 50%; width: 50px; height: 50px; margin: 5px; display: flex; align-items: center; justify-content: center;">18</div> <div style="border: 1px solid black; border-radius: 50%; width: 50px; height: 50px; margin: 5px; display: flex; align-items: center; justify-content: center;">8</div> <div style="border: 1px solid black; border-radius: 50%; width: 50px; height: 50px; margin: 5px; display: flex; align-items: center; justify-content: center;">4</div> <div style="border: 1px solid black; border-radius: 50%; width: 50px; height: 50px; margin: 5px; display: flex; align-items: center; justify-content: center;">9</div> <div style="border: 1px solid black; border-radius: 50%; width: 50px; height: 50px; margin: 5px; display: flex; align-items: center; justify-content: center;">8</div>





6- Groupe les points par 10 pour trouver combien il y en a :



D	U

Il y a points.

7- Ecris dans les nuages le nombre de jetons:



8 - Barre les écritures fausses :

9 - Ecris les nombres en chiffres :

soixante-et-un

61

soixante-quinze

.....

soixante-quatre

.....

soixante-quatorze

.....

soixante-dix-huit

.....

soixante-huit

.....

10 - Calcule :

$10+10+10+10+10+10=.....$

$60+5=.....$

$70+6=.....$

$10+10+10+10+10+10+1=.....$

$60+15=.....$

$60+9=.....$

$10+10+10+10+10+10+10+8=.....$

$60+1=.....$

$70+8=.....$

$5+10+10+10+10+10+10+10=.....$

$60+11=.....$

$60+6=.....$

$10+10+10+10+10+10+10=.....$

$60+10=.....$


$70+7=.....$

11 - Dessine avec le moins de pièces et de billets possibles :



Logique

Dans le dessin de gauche, le reflet du miroir ne comporte pas d'erreur.
Dans le dessin de droite, le reflet compte dix erreurs. Entoure-les.



Le reflet dans l'eau comporte 15 erreurs. Entoure-les.

