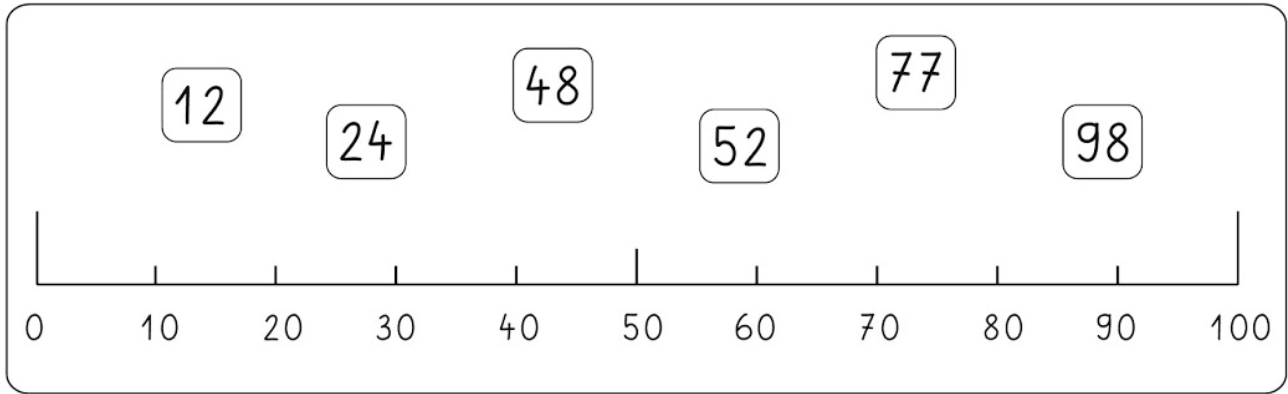


Numération

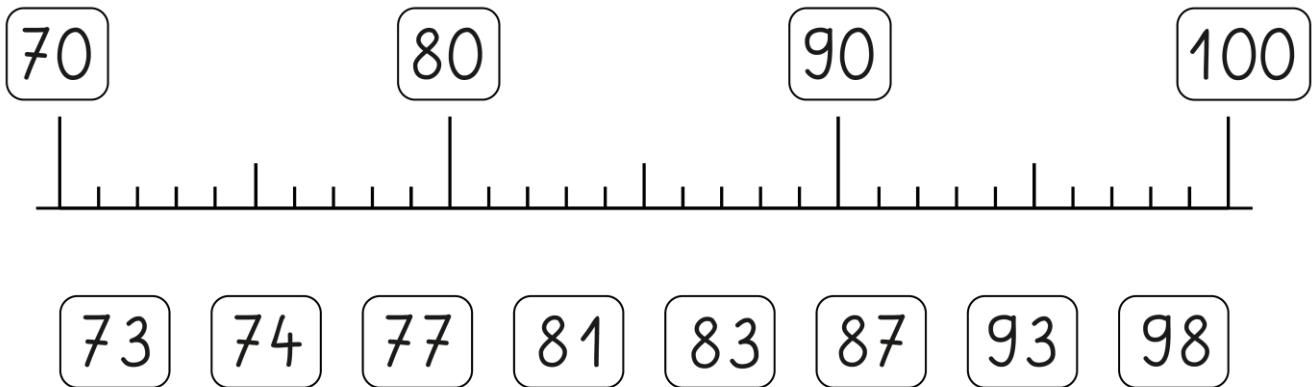
23



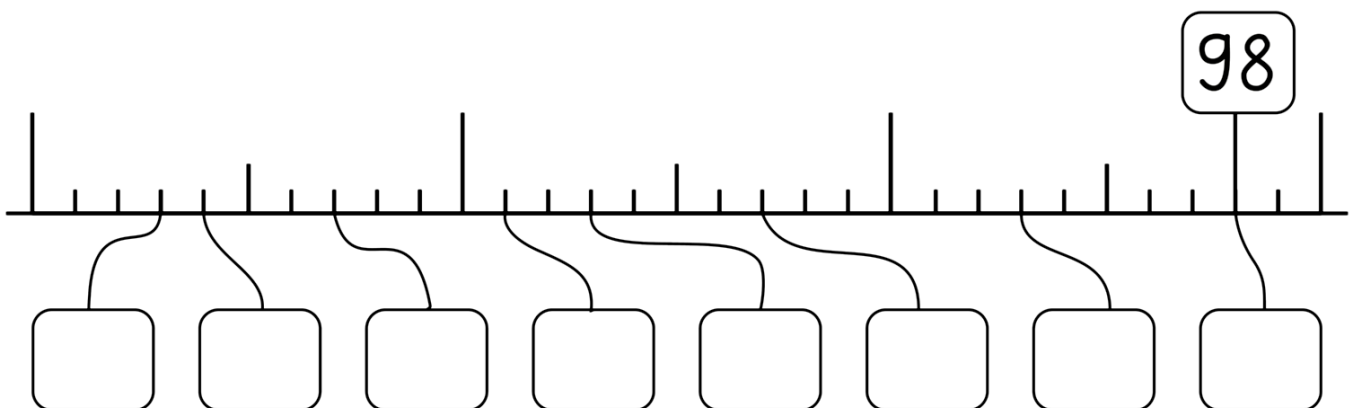
1- Relie :



2- Relie :



3- Complète :



4- Trouve deux autres nombres que le 46 en combinant les chiffres ci-dessous et complète les cases.

7 . 6 . 4

| | | |
|----|----------|--------------|
| 46 | $40 + 6$ | quarante-six |
| | | |
| | | |

5- Relie les différentes écritures d'un même nombre :

| | | |
|-----------------------|----|-----------|
| quatre-vingt-trois | 68 | $60 + 8$ |
| quatre-vingt-treize | 83 | $39 + 39$ |
| soixante-dix-huit | 78 | $80 + 3$ |
| soixante-huit | 93 | $90 + 3$ |
| quatre-vingt-dix-neuf | 19 | $10 + 9$ |
| dix-neuf | 80 | $4 + 20$ |
| quatre-vingts | 99 | $40 + 40$ |
| vingt-quatre | 24 | $90 + 9$ |

6 - Trouve le signe qui convient : < > =

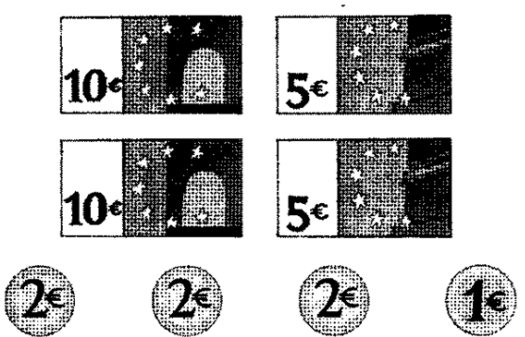
| | | | | | |
|---------|-----------------------------|---------|---------|-----------------------------|---------|
| $5 + 5$ | $\textcircled{=}$ | $6 + 4$ | $1 + 5$ | $\textcircled{}$ | $3 + 5$ |
| $6 + 2$ | $\textcircled{}$ | $5 + 4$ | $8 + 2$ | $\textcircled{}$ | $7 + 2$ |
| $3 + 4$ | $\textcircled{}$ | $1 + 6$ | $6 + 4$ | $\textcircled{}$ | $5 + 4$ |
| $5 + 3$ | $\textcircled{}$ | $4 + 5$ | $2 + 7$ | $\textcircled{}$ | $6 + 3$ |
| $7 + 2$ | $\textcircled{}$ | $1 + 8$ | $4 + 2$ | $\textcircled{}$ | $3 + 2$ |
| $3 + 5$ | $\textcircled{}$ | $4 + 5$ | $1 + 8$ | $\textcircled{}$ | $4 + 5$ |

8 - Calcule :

| | | | |
|------------------------|------------------------|------------------------|------------------------|
| $57 + 10 = \dots\dots$ | $89 + 10 = \dots\dots$ | $64 + 10 = \dots\dots$ | $80 + 10 = \dots\dots$ |
| $77 - 10 = \dots\dots$ | $56 - 10 = \dots\dots$ | $97 - 10 = \dots\dots$ | $70 - 10 = \dots\dots$ |
| $49 + 1 = \dots\dots$ | $69 + 1 = \dots\dots$ | $89 + 1 = \dots\dots$ | $59 + 1 = \dots\dots$ |
| $70 - 1 = \dots\dots$ | $90 - 1 = \dots\dots$ | $80 - 1 = \dots\dots$ | $75 - 1 = \dots\dots$ |


9 - Problème avec la monnaie :

Combien y a-t-il d'argent ?

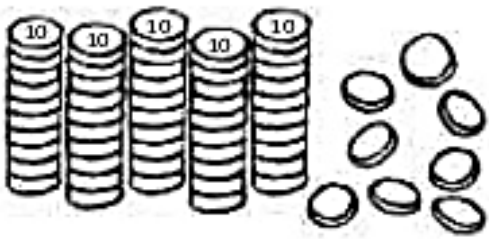


Il y a €.

Dessine avec le moins de billets et le moins de pièces possible.




10 - Observe et complète :



| | |
|---|---|
| D | U |
| 5 | 8 |



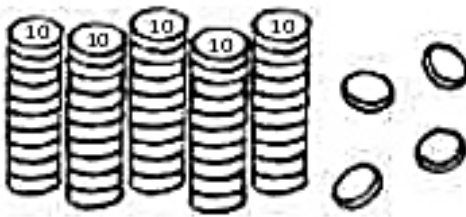
$$\boxed{50} + \boxed{8} = \boxed{58}$$



| | |
|---|---|
| D | U |
| | |




$$\boxed{} + \boxed{} = \boxed{}$$



| | |
|---|---|
| D | U |
| | |




$$\boxed{} + \boxed{} = \boxed{}$$



| | |
|---|---|
| D | U |
| | |



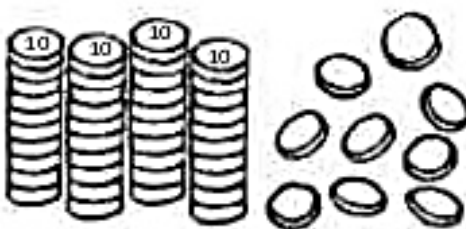
$$\boxed{} + \boxed{} = \boxed{}$$



| | |
|---|---|
| D | U |
| | |



$$\boxed{} + \boxed{} = \boxed{}$$



| | |
|---|---|
| D | U |
| | |



$$\boxed{} + \boxed{} = \boxed{}$$

Entraîne-toi

Colorie la grille en respectant la règle.

-Rouge : plus petit que 20

-Vert : entre 20 et 30

-Bleu : plus grand que 30

| | | | | | |
|----------|-----------|----------|----------|----------|----------|
| $45 + 2$ | $3 + 28$ | $4 + 36$ | | | |
| $2 + 12$ | $3 + 9$ | | | | |
| $19 + 4$ | $4 + 15$ | $3 + 18$ | | | |
| $4 + 2$ | $14 + 3$ | $1 + 6$ | | | |
| $30 + 5$ | $2 + 17$ | $15 + 2$ | $16 + 3$ | $3 + 13$ | $2 + 38$ |
| $4 + 11$ | $1 + 9$ | $2 + 8$ | | | |
| $18 + 3$ | $3 + 7$ | $4 + 21$ | | | |
| $5 + 10$ | $3 + 12$ | | | | |
| $2 + 29$ | $30 + 30$ | $1 + 39$ | | | |