

Numération

3



1- Complète les cases vides :

1	2		4	5		7		9			
---	---	--	---	---	--	---	--	---	--	--	--

		3			6		8		10		
--	--	---	--	--	---	--	---	--	----	--	--





4		6	7								
---	--	---	---	--	--	--	--	--	--	--	--

							10				
--	--	--	--	--	--	--	----	--	--	--	--

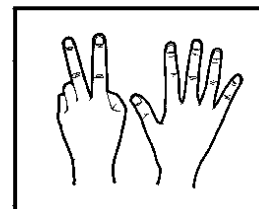
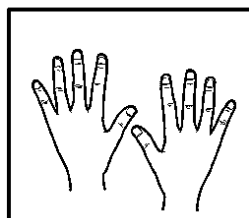
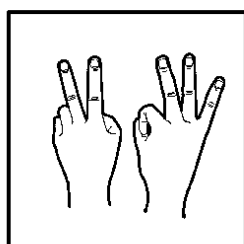
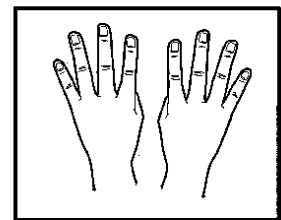
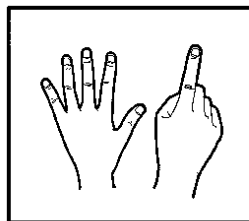
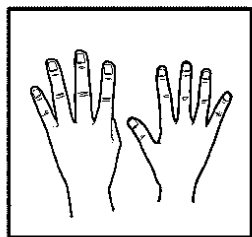
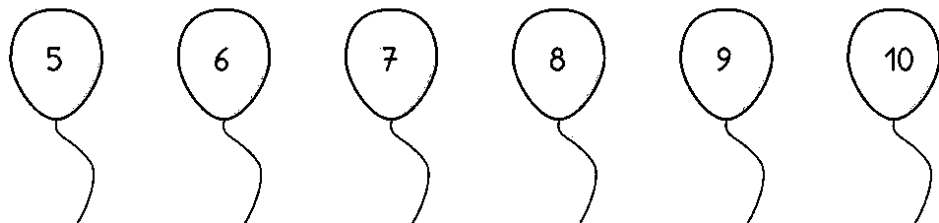
2- Relie les nombres dans l'ordre avec une règle :

8. 7. 11. 9. 10. 11. 7. 8. 12. 13. 5. 6. 9. 10. 11. 7. 8. 14. 15. 3. 4. 5. 6. 7. 8. 9. 10. 11. 12. 13. 14. 15. 16.



3-Entoure le nombre correspondant aux oiseaux :

| | | | | | | | | | | | | | | | | | | | |
|---|---|---|---|---|---|---|---|---|----|--|---|---|---|---|---|---|---|---|----|
|  | | | | | | | | | |  | | | | | | | | | |
| 1 | 2 | 3 | 4 | 5 | 6 | 7 | 8 | 9 | 10 | 1 | 2 | 3 | 4 | 5 | 6 | 7 | 8 | 9 | 10 |
|  | | | | | | | | | |  | | | | | | | | | |
| 1 | 2 | 3 | 4 | 5 | 6 | 7 | 8 | 9 | 10 | 1 | 2 | 3 | 4 | 5 | 6 | 7 | 8 | 9 | 10 |


4-Relie :



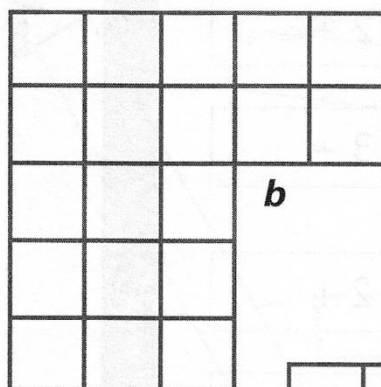
5 - Entoure dix fleurs dans chaque jardin :




6 - Colorie quinze cases dans chaque figure :



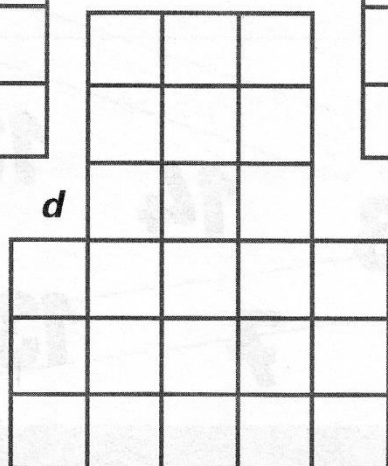
a




b



c



d

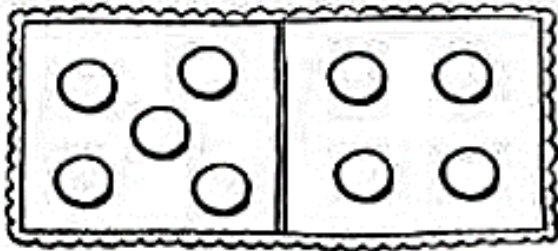


e

Range les figures en commençant par celle qui le moins de cases .

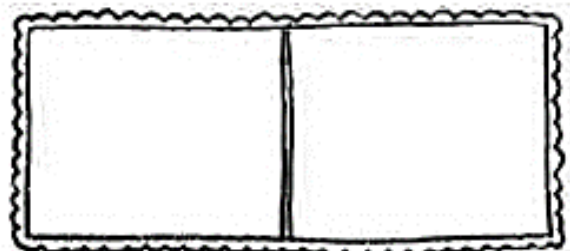
7- Dessine les points puis complète les additions :

$5 + 4$



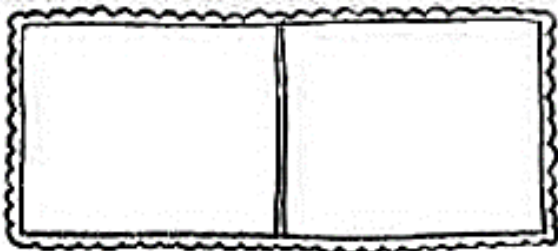
$\boxed{5} + \boxed{4} = \boxed{}$

$4 + 2$



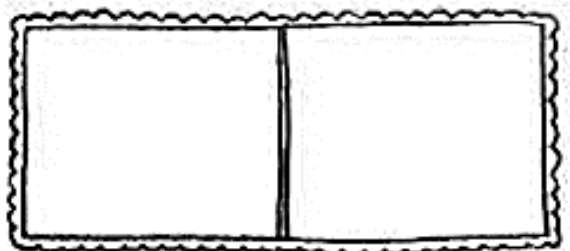
$\boxed{} + \boxed{} = \boxed{}$

$7 + 1$



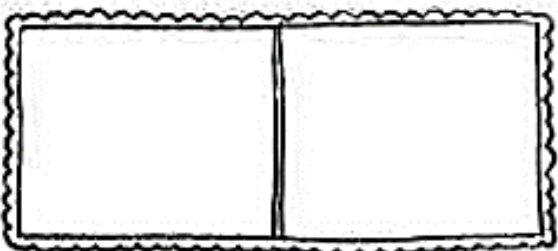
$\boxed{} + \boxed{} = \boxed{}$

$5 + 2$



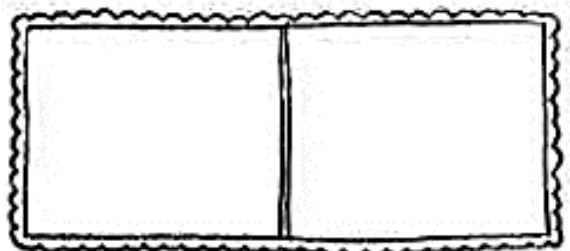
$\boxed{} + \boxed{} = \boxed{}$

$2 + 3$



$\boxed{} + \boxed{} = \boxed{}$

$6 + 3$



$\boxed{} + \boxed{} = \boxed{}$

Coloriage magique

