

Numération



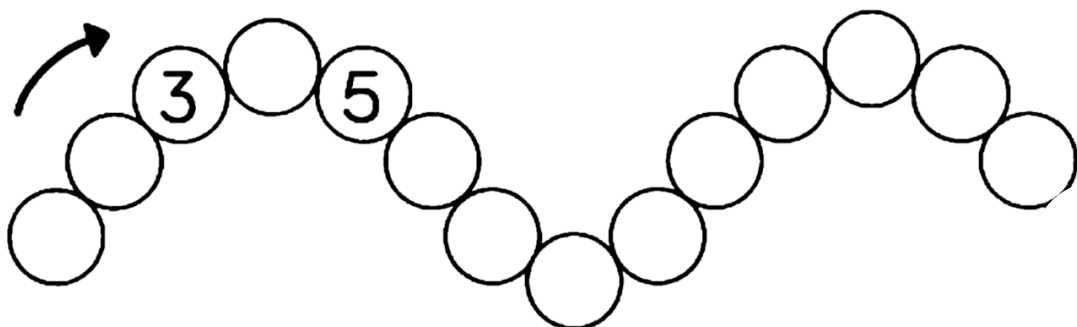
1- Complète les cases de la boîte de dix jetons :

1									
---	--	--	--	--	--	--	--	--	--


2- Complète les nuages sans écrire les nombres dans les cases de la boîte de dix jetons :

--	--	--	--	--	--	--	--	--	--


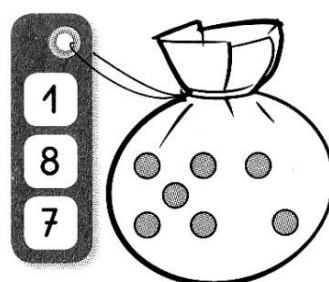


3- Complète le collier de nombres




4- Compte les chapeaux :



5 - Colorie sur l'étiquette le nombre de billes rangées dans le sac :

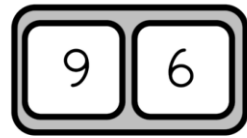
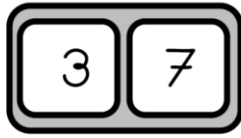
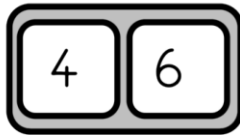
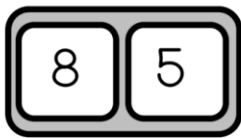


6- Dessine le nombre de points attendus :

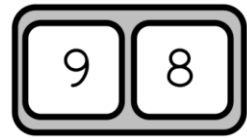
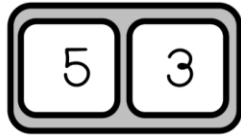
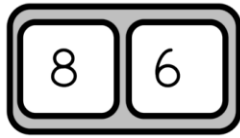
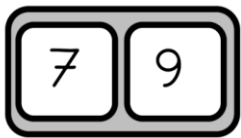


7- Compare :

Colorie le plus grand nombre



Colorie le plus petit nombre



8- Calcule :

$$2 + \begin{array}{c} \bullet \\ \bullet \bullet \\ \bullet \end{array} = \underline{\quad}$$

$$4 + \begin{array}{c} \bullet \\ \bullet \bullet \\ \bullet \end{array} = \underline{\quad}$$

$$6 + \begin{array}{c} \bullet \\ \bullet \end{array} = \underline{\quad}$$

$$3 + \begin{array}{c} \bullet \bullet \\ \bullet \bullet \end{array} = \underline{\quad}$$

Labyrinthe du chat et de la taupe

